

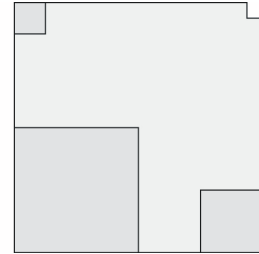
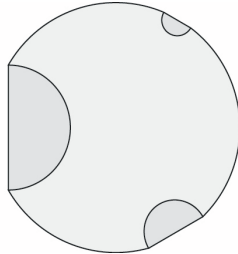
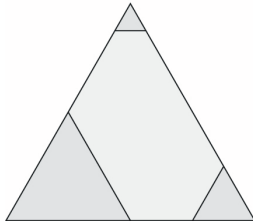


School:  
Name of Student:  
Sets: triangle, circle, square  
Further tools: paper, pencil  
Date:

**STUDENT**  
PULSE Task Number  
**B**  
**314**

**Description of the task:**

Check whether the sets contain all the elements.



**Solution(s) of the task:**

According to what criteria can the elements be grouped? \_\_\_\_\_

How many basic elements are there in a set? \_\_\_\_\_

Write down these numbers split according to colours: \_\_\_\_\_

Write down these numbers split according to the smaller forms: \_\_\_\_\_

\_\_\_\_\_

Write down these numbers split according to the smaller forms and colours: \_\_\_\_\_

**Remarks / Self-evaluation:**