



School:
 Name of Student:
 Sets: triangle
 Further tools: paper, coloured pencil
 Date:

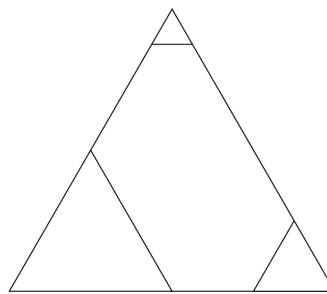
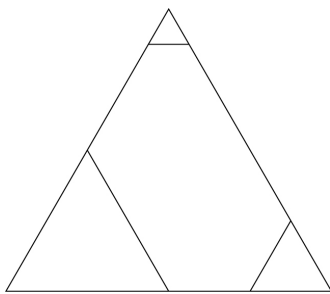
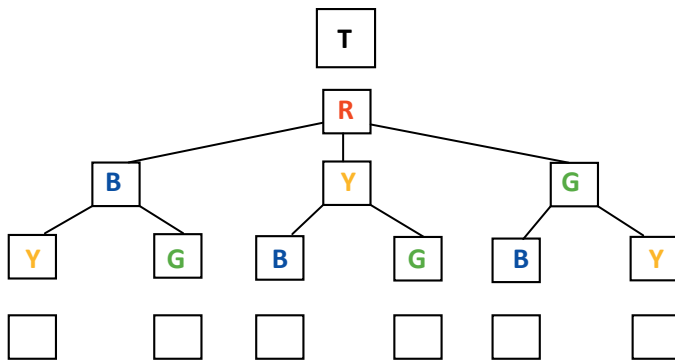
STUDENT
 PUSE Task Number
A
402

Description of the task:

There are 6 triangles with red base colour in the set. Two of them are missing. Can you find them?
 Draw them and indicate their codes.



Solution(s) of the task:



Code: _____

Code: _____

Remarks / Self-evaluation: